

KINGS SCHOOLS-KABOWA

REVISION WORK

CLASS : P.3

LEARNING AREA : LITERACY

29th May 2020

Name: _____

Date: _____

SECTION	MARKS
A	
B	
TOTAL	

SECTION A

1. Mention the place where we go to learn.

2. State any one use of a cow at home.

3. Underline the duty of a doctor in our community.

Stealing , farming , treating , fighting

4. Draw one item used to manage the rainy weather.

5. Name one material used in keeping our bodies clean.

6. What is the name of the dangerous object shown below?



7. Tick the place where people keep their money safely.
water , bank , soil

8. Give one reason why people keep dogs at home?

9. Name the body organ shown below.



10. How do you keep your classroom clean?

11. Why do family members boil water for drinking

12. Write down any one means of road transport.

13. Give the use of this tool below.



14. How many days make up a week?

15. Write down any one meal commonly eaten at school.

16. State one way of caring for animals at home.

17. Circle one way how children are abused.

rapping , praying , sweeping


18. Mention one way of keeping our eyes clean.

19. Why do people go to church?

20. Name one element of weather.

SECTION B

21. (a) Name these means of transport.



(b) Mention two animals used for transport.

(i) _____

(ii) _____

22. (a) Give two uses of food in our bodies.

(i) _____

(ii) _____

(b) Mention one place where people in town get food from.

(i) _____

(ii) _____

23. Match the animals with their young ones.

sheep

puppy

cat

calf

elephant

kitten

dog

lamb

24. (a) What is a nuclear family?

A nuclear family is a family where we find

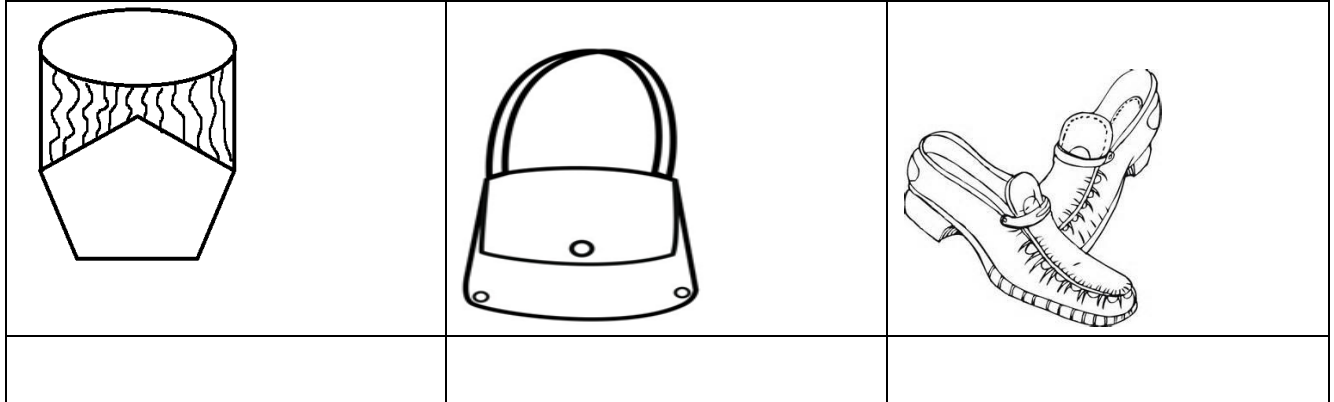
_____, _____ and _____

(b) Mention two members of an extended family.


(i) _____

(ii) _____

25. Name the items below, made from animal skins and hides.



26. (a) Give names of the road signs below.






(b) Which colour of the traffic lights tells drivers to get ready?

27.(a) Name one immunisable disease.

(b) Give two places where people take children for immunisation.

28.State the materials we use to make the following items.

29.(a)In which season do farmers carry out the following?

(i)planting _____ season

(ii) harvesting _____ season

(b) Name the garden tool used for watering crops.

30.(a) Name two examples of domestic animals.

(b) Which domestic animal guards our home?
